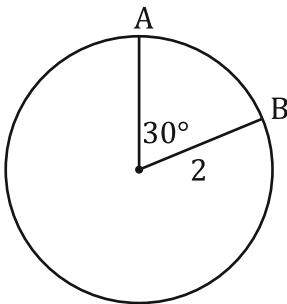


Finding Lengths of Arcs and Areas of Sectors

Doesn't that sound like fun?

Well okay, maybe not to you, but these problems are fun. Let's take a look...

Find the length (not the measure) of \widehat{AB} .



Step 1. Find the fraction of the circle's circumference that \widehat{AB} represents. How? Like this...

$$\frac{30^\circ}{360^\circ} = \frac{1}{12}$$

This is the measure of the part of the circle we want over the total measure of the circle.

Step 2. Find the circumference of the circle...

$$C = 2\pi r$$

$$C = 2\pi \cdot 2$$

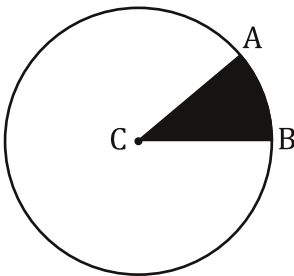
$$C = 4\pi$$

Step 3. Multiply the circumference by the fraction... and presto!

$$4\pi * \frac{1}{12} = \frac{4\pi}{12} = \frac{\pi}{3}$$

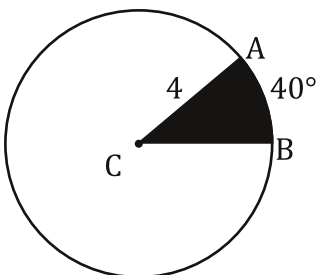
$$AB = \frac{\pi}{3} \approx 1.05$$

Next, let's look at Sectors. What the heck is a sector? A sector is a portion of the area of a circle enclosed by two radii and an arc. Huh? Well if you had a pie and you cut a piece out of it that piece would be a sector of the pie. Like this...



The shaded area in the the diagram is a sector. Sector CAB is a sector of $\odot C$.

Find the area of sector CAB.



Step 1. Find the fraction of the circle that sector CAB represents. How? Like this...

$$\frac{40^\circ}{360^\circ} = \frac{1}{9}$$

Step 2. Find the area of the entire circle...

$$A = \pi r^2$$

$$A = \pi 4^2$$

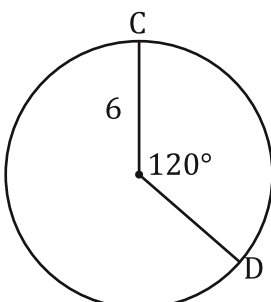
$$A = 16\pi$$

Step 3. Multiply the area by the fraction... and presto!

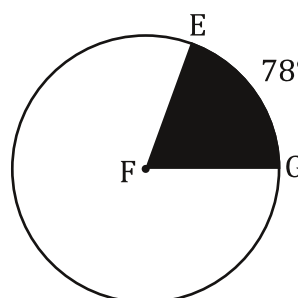
$$16\pi * \frac{1}{9} = \frac{16\pi}{9}$$

$$mAB = \frac{16\pi}{9} \approx 5.59u^2$$

You try! Find the length of \widehat{CD} .

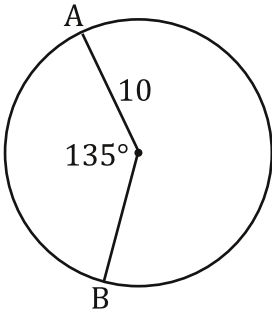


You try! Find the area of sector EFG.

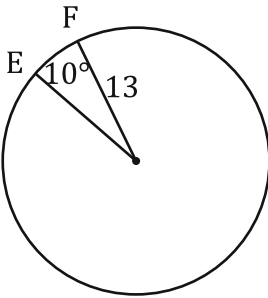


Calculate the length of each arc...

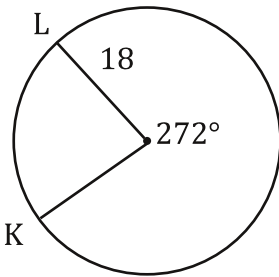
1.



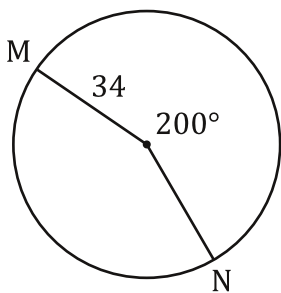
3.



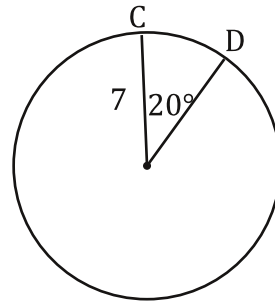
5.



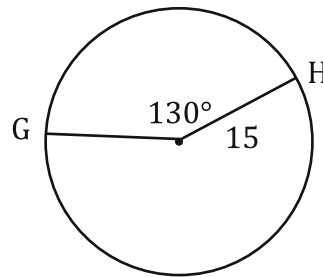
7.



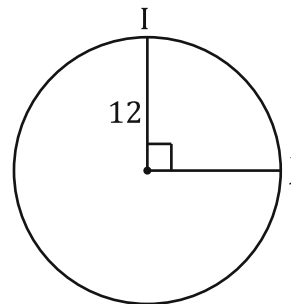
2.



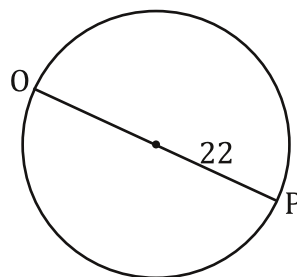
4.



6.



8.

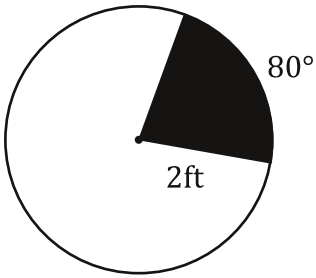


Bubble all the correct answers from above. Don't bubble incorrect answers.

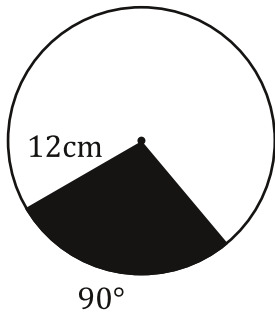
- 88.56
 23.56
 34.03
 2.55
 85.45
 76.39
 118.68
 2.27
 25.34
 37.48
 69.12
 49.57
 18.85
 2.44

Find the area of each shaded sector..

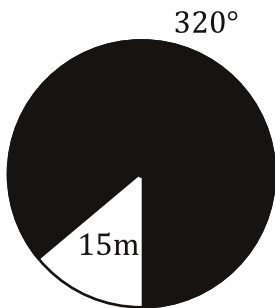
9.



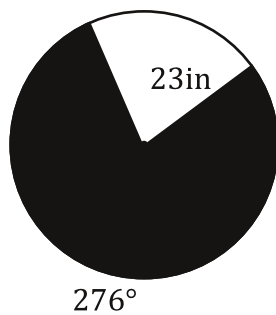
11.



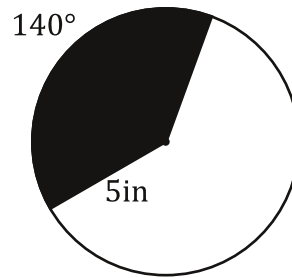
13.



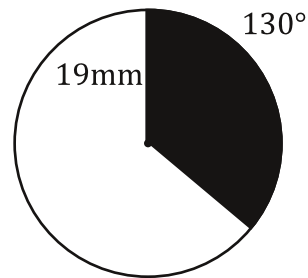
15.



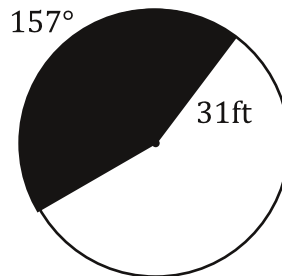
10.



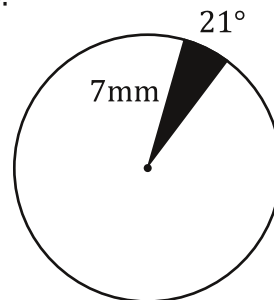
12.



14.



16.



Bubble all the correct answers from above. Don't bubble incorrect answers.

- 2.79
 34.57
 1274.13
 146.91
 8.98
 628.32
 579.34
 67.09
 45.78
 698.87
 31.50
 113.1
 30.54
 1265.75